


WELCOME
TO
SCHOOL





LIBRARY

CAFETERIA



GYM

MATH TEST

Student's name: _____

$1+1 = \square$

$0+3 = \square$

$1+2 = \square$

$2+0 = \square$





SCIENCE TEST

Student's name: _____

Circle all the pictures of **animals**.



TODAY'S SCHEDULE



**ABCD
EFG
HIJK
LMNOP
QRSTU
VWXYZ**